








# VASTELAVONDZOTELAAND

DOOLHOF  
HELP NILLEKE,  
NAAR ZIJN OUDERS  
TOE





# VASTELAOVENDZOTELAAND

REKEN MAAR UIT...



$$\times 7 = 56$$



-



$$= 242$$



+



=



:



=








# VASTELAOVENDZOTELAAND

WAAR LIGT WAT...?  
PLAATS DE LETTER ACHTER DE PLAATSNAAM



1: OUDENBOSCH

2: ZEGGE

3: KRUISLAND

4: ZEVENBERGEN

5: STEENBERGEN

6: DINTELOORD

7: BERGEN OP ZOOM

8: BOSSCHENHOOFD

9: BREDA

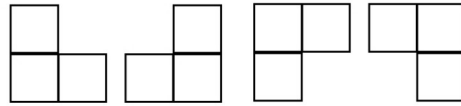
10: ROOSENDAAL

11: STAMPERSGAT



# VASTELAOVEDZOTELAAND

## PAARDENSPRONGEN



G start	T	E	
E	N	E	T
J	O	L	R
G	E	O	M

Antwoord 1:

---

C start	M	A	
V	S	N	M
R	A	U	L
N	A	E	R

Antwoord 1:

---

F start	E	T	
S	A	E	J
N	E	K	V
R	E	T	S

Antwoord 3:

---

C start	H	E	
F	T	O	T
O	E	S	T
I	N	O	R

Antwoord 4:

---



# VASTELAOPEDZOTELAAND

## GEHEIME OPDRACHT:

DE NAR HEEFT EEN GEHEIME OPDRACHT,

$9 \times 9 =$

= E

$7 \times 9 =$

= I

$8 \times 8 =$

= R

$6 \times 9 =$

= N

$9 \times 8 =$

= O

$6 \times 11 =$

= H

$9 \times 11 =$

= D

$4 \times 11 =$

= A

$7 \times 11 =$

= R

$1 \times 11 =$

= K
























63	54	66	44	11	81	54		81	54		
77	72	54	99		99	64	44	44	63	81	54






















# VASTELAOPEDZOTELAAND

SUDOKU:  
VUL AAN

	 6	 4	 3	 2	
 5	 3			 6	 4
 4					 1
 3					 2
 6	 4			 1	 3
	 1	 3	 4	 5	

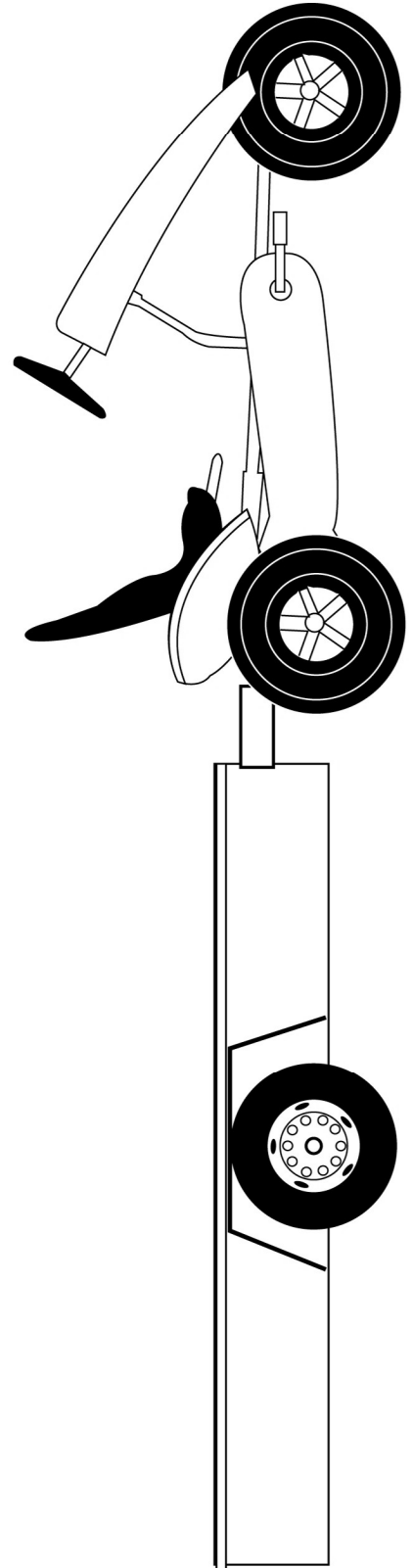


		 1	 5		
	 5		 4	 6	
 5	 3	 4	 6		 2
 1			 3	 5	 4
	 1	 3		 4	
		 5	 1		



# VASTELAVONDZOTELAAND

ONTWERP JE EIGEN PRAALWAGEN  
VOOR DE SCHOLEN OPTOCHT





# VASTELAVONDZOTELAND

## CONFETTI BLAD:

DE NAR HEEFT CONFETTI OVER SOMMEN GEGOOID.  
KUN JIJ DE SOMMEN NOG IN ORDE MAKEN?

$21 : 3 = \text{yellow circle}$

$8 \times \text{green circle} = 16$

$3 \times 6 = \text{blue circle}$

$\text{pink circle} \times 5 = 55$

$10 : 0 = \text{green circle}$

$3 \times \text{yellow circle} = 9$

$\text{green circle} \times 8 = 16$

$12 : 3 = \text{pink circle}$

$22 : \text{blue circle} = 22$

$33 : 3 = \text{white circle}$

$\text{pink circle} \times 3 = 33$

$2 \times \text{blue circle} = 4$

$\text{pink circle} \times 1 = 11$

$8 \text{ white circle} 4 = 24$

$3 \times 2 = \text{yellow circle}$

$\text{green circle} \times 7 = 21$

$\text{white circle} \times 2 = 2$

$5 \times \text{white circle} = 40$

$6 \times \text{pink circle} = 36$

$5 \times 2 = \text{yellow circle}$

$4 \times \text{green circle} = 12$

$44 : 4 = \text{blue circle}$

$3 \times \text{white circle} = 9$

$2 \times \text{green circle} = 16$

$\text{blue circle} \text{ white circle} \times 3 = 12$

$22 : 2 = \text{yellow circle}$

$11 \times \text{pink circle} = 0$

$2 \times 10 = \text{blue circle}$

$3 \times \text{green circle} = 6$

$3 \times 3 = \text{white circle}$

$\text{pink circle} \times 1 = 4$

$11 \times 6 = \text{white circle}$

$7 \times \text{yellow circle} = 56$

$121 : 11 = \text{yellow circle}$

$\text{blue circle} \times 7 = 21$

$8 \times \text{pink circle} = 16$

$\text{green circle} \times 9 = 18$

$3 \times \text{white circle} = 3$

$3 \times \text{yellow circle} = 12$

$4 : 2 = \text{blue circle}$

$1 \times \text{white circle} = 15$

$5 \times \text{green circle} = 30$

$7 \times \text{white circle} = 28$

$9 \times \text{pink circle} = 81$



# VASTELAVONDZOTELAAND

## KLEURPLAAT

